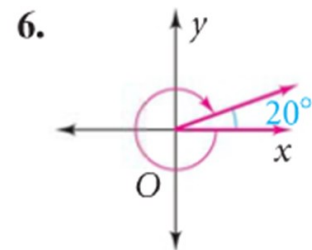
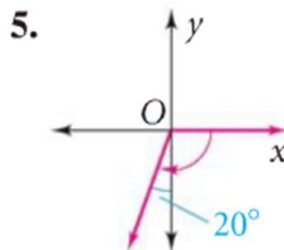
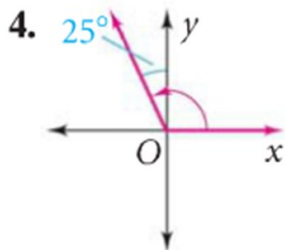
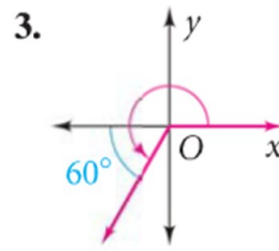
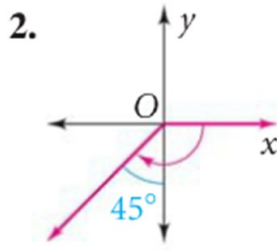
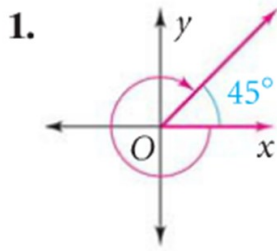


Angle Measurement in Standard position

Name: _____ Period: _____ Date: _____

Find the measure of each angle in standard position.



Sketch each angle in standard position.

7. 40°

8. -130°

9. -270°

10. 120°

11. 95°

Sketch each angle and then answer.

Find the measure of an angle between 0° and 360° coterminal with each given angle.

12. 385°

13. 575°

14. -405°