

Name _____
Date _____ Period _____

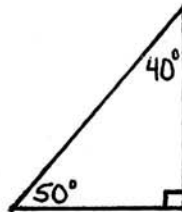
Sections 10.4-10.5: Tangent, Sine, Cosine

Measure each angle and each side length of the triangle. Write the measures in the appropriate places.

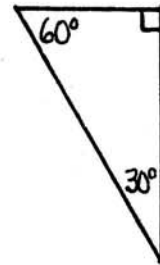
Small



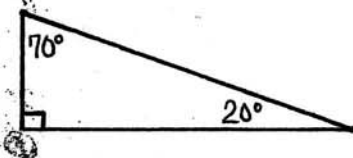
Small



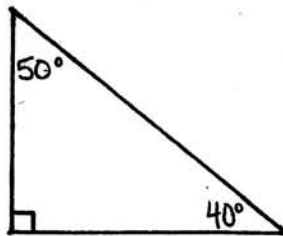
Small



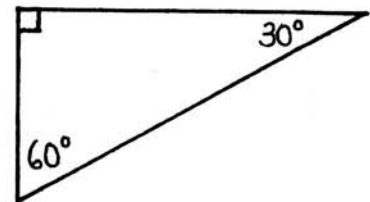
Medium



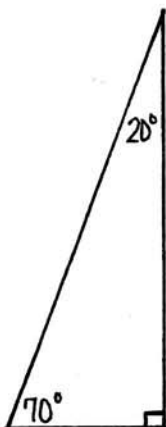
Medium



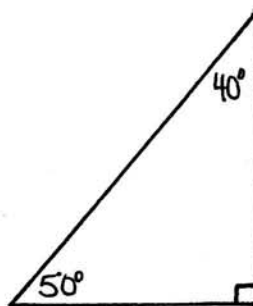
Medium



Large



Large



Large

