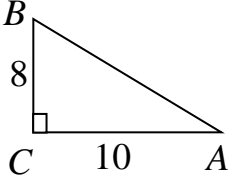
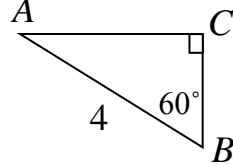
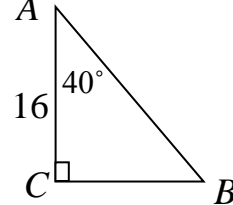
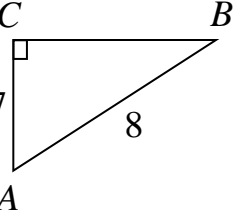


| Triangle  | Solve for all angles of the triangle<br>*Use Triangle Sum<br>or *Use Inverse Trig. Functions |            |            | Solve for all side lengths of the triangle<br>*Use Pythagorean Theorem<br>or *Use Trig. Formulas |                 |                 |
|---|--|------------|------------|--|-----------------|-----------------|
|   | $\angle A$   | $\angle B$ | $\angle C$ | $\overline{AB}$  | $\overline{BC}$ | $\overline{CA}$ |
|    |  |            |            |  |                 |                 |
|    |  |            |            |  |                 |                 |
|    |  |            |            |  |                 |                 |
|  |  |            |            |  |                 |                 |