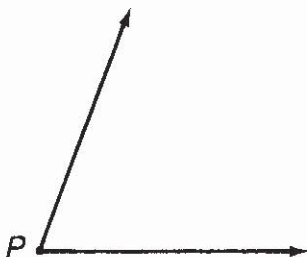



Why Did the Brontosaurus Need Band-Aids?

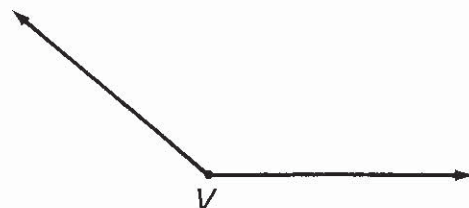
For each exercise, circle the letter of the best estimate. Write this letter in the box containing the number of the exercise.




- ① $m\angle P$ is about
B 35° **S** 70°




- ② $m\angle X$ is about
T 65° **O** 30°



- ③ $m\angle V$ is about
E 140° **J** 95°



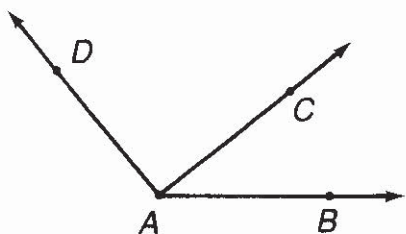
- ④ $m\angle G$ is about
L 55° **I** 25°



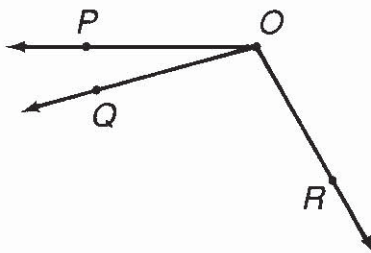
- ⑤ $m\angle K$ is about
O 50° **F** 80°



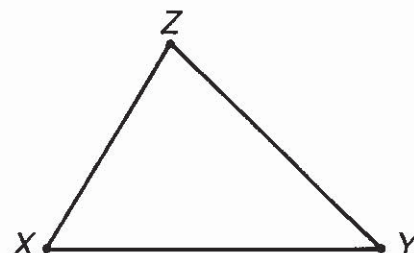
- ⑥ $m\angle W$ is about
R 155° **C** 110°



- ⑦ $m\angle BAC$ is about
S 40° **P** 15°



- ⑩ $m\angle POR$ is about
M 160° **F** 120°



- ⑬ $m\angle X$ is about
P 35° **H** 60°

- ⑧ $m\angle CAD$ is about
U 65° **I** 90°

- ⑪ $m\angle POQ$ is about
V 40° **N** 15°

- ⑭ $m\angle Y$ is about
S 45° **L** 25°

- ⑨ $m\angle BAD$ is about
G 100° **O** 130°

- ⑫ $m\angle QOR$ is about
R 105° **B** 140°

- ⑮ $m\angle Z$ is about
D 75° **G** 40°

10	2	6	13	8	1	15	4	11	9	14	5	12	3	7
----	---	---	----	---	---	----	---	----	---	----	---	----	---	---