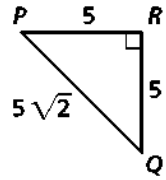
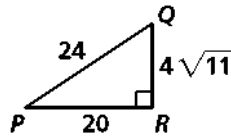
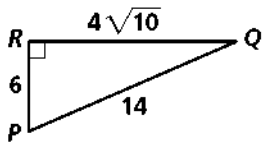


Name: \_\_\_\_\_ Date: \_\_\_\_\_ Period: \_\_\_\_\_

G.SRT

## Practice with Cosine Ratios

Write the ratios for sin, cos, and tan of angle P.



Find the value of  $x$ . Round answers to the nearest tenth.

