

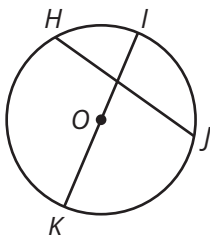
Skills Practice

Name _____ Date _____

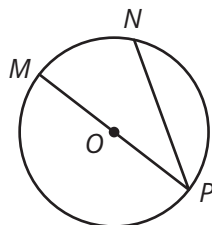
I. Identifying Circle Parts

A. Identify the indicated part of each circle. Explain your answer.

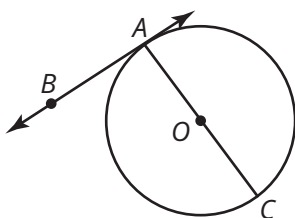
1. O



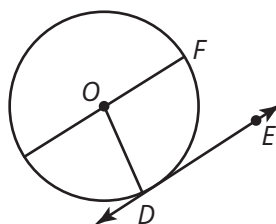
2. \overline{NP}



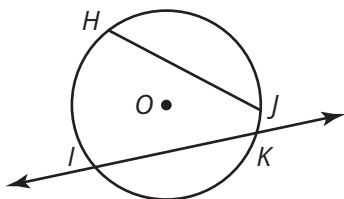
3. \overleftrightarrow{AB}



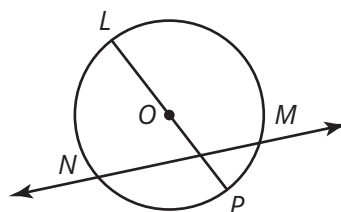
4. D



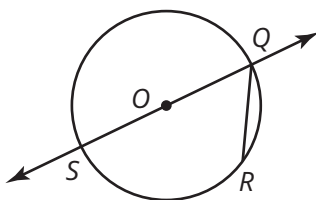
5. \overline{JH}



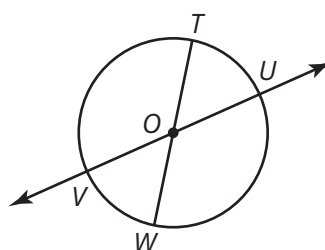
6. \overleftrightarrow{MN}



7. $\angle SQR$



8. $\angle TOU$



B. Identify each angle as an inscribed angle or a central angle.

1. $\angle URE$

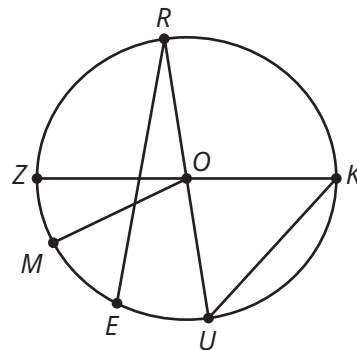
2. $\angle ZOM$

3. $\angle KOM$

4. $\angle ZKU$

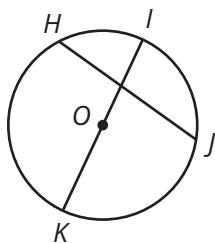
5. $\angle MOU$

6. $\angle ROK$

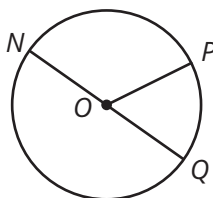


C. Classify each arc as a major arc, a minor arc, or a semicircle.

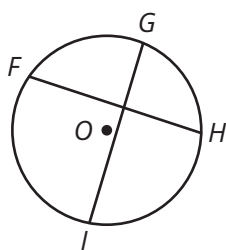
1. \widehat{HI}



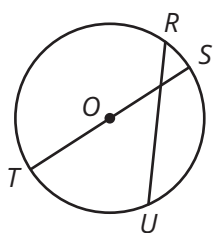
2. \widehat{NPQ}



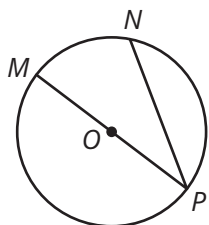
3. \widehat{FHI}



4. \widehat{TRS}



5. \widehat{NP}



6. \widehat{JML}

