
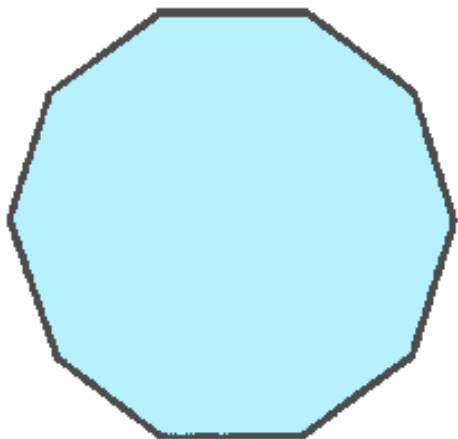


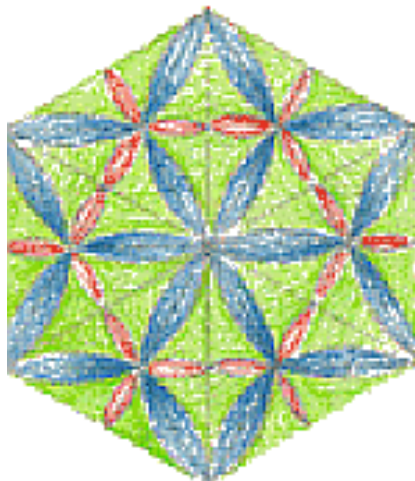


9-4 Symmetry

Name: _____ Per: _____

Directions: In each picture below, draw a line of symmetry. That is, draw a line so that two congruent pictures are formed. There may be more than one line of symmetry in each picture!



Draw all lines of symmetry. If there is none, write "no symmetry"

A B C D E F

G H I J K L

M N O P Q

R S T U V

W X Y Z